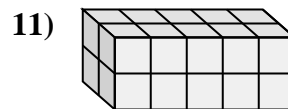
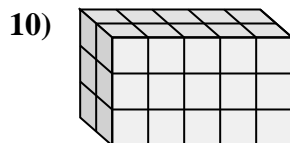
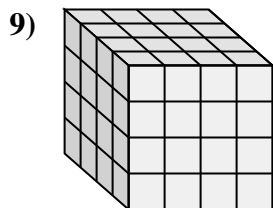
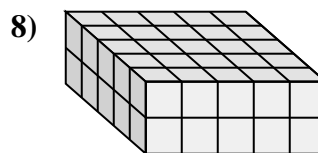
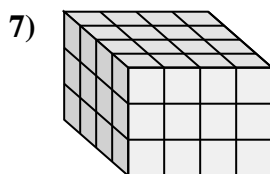
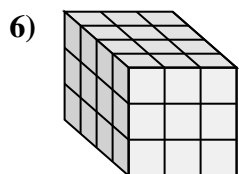
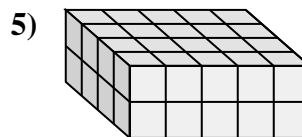
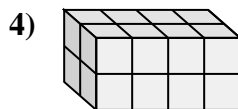
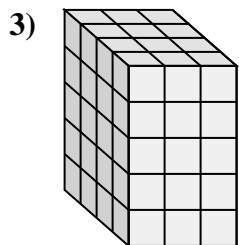
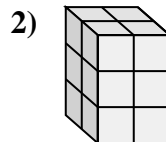
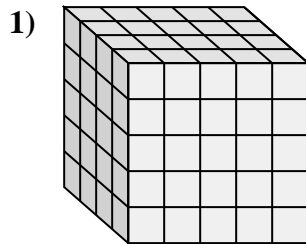
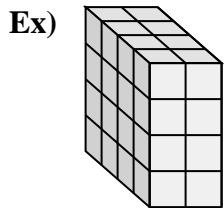




Match each problem with the equation that could represent it. Answer with the missing term and letter.



Answers

Ex. B, 32

1. E, 4

2. D, 12

3. F, 3

4. J, 2

5. C, 5

6. H, 3

7. G, 4

8. A, 5

9. L, 4

10. K, 30

11. I, 20

A. $__ \times 5 \times 2 = 50$

B. $4 \times 2 \times 4 = __$

C. $4 \times __ \times 2 = 40$

D. $2 \times 2 \times 3 = __$

E. $__ \times 5 \times 5 = 100$

F. $4 \times __ \times 5 = 60$

G. $4 \times __ \times 3 = 48$

H. $4 \times __ \times 3 = 36$

I. $2 \times 5 \times 2 = __$

J. $__ \times 4 \times 2 = 16$

K. $2 \times 5 \times 3 = __$

L. $4 \times __ \times 4 = 64$